

Name: \_\_\_\_\_

Date: \_\_\_\_\_


# Types of Clouds

Directions: Match the cloud name with the correct picture.




- |              |               |
|--------------|---------------|
| altocumulus  | cumulonimbus  |
| altostratus  | cumulus       |
| cirrocumulus | nimbostratus  |
| cirrostratus | stratus       |
| cirrus       | stratocumulus |

1) \_\_\_\_\_



2) \_\_\_\_\_




High

3) \_\_\_\_\_



4) \_\_\_\_\_




5) \_\_\_\_\_



Middle



6) \_\_\_\_\_



7) \_\_\_\_\_



8) \_\_\_\_\_



10) \_\_\_\_\_

9) \_\_\_\_\_

Low